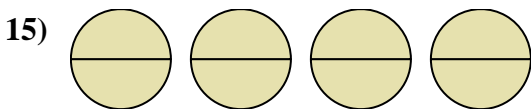
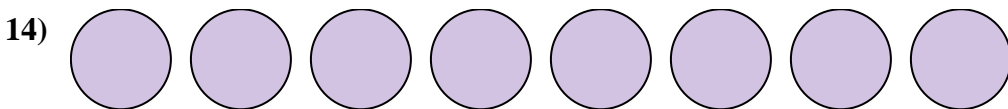
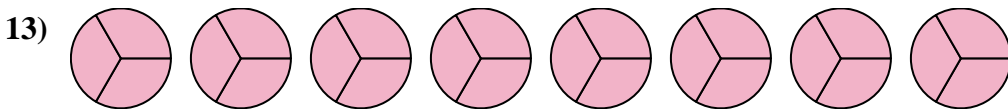
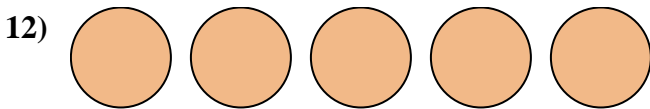
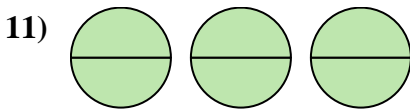

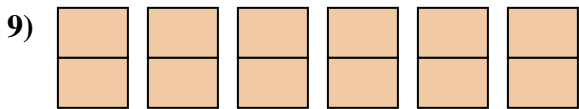
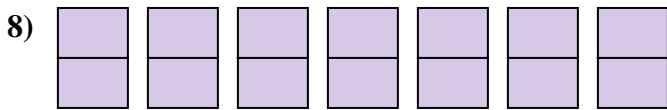
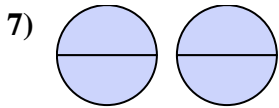
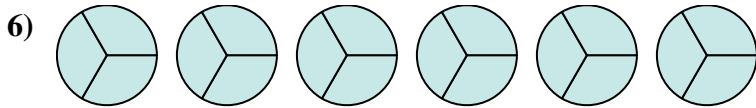
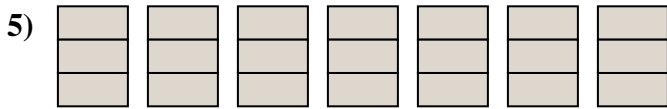
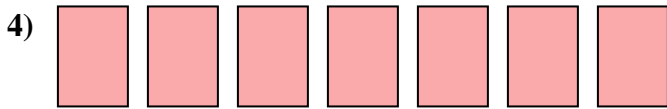
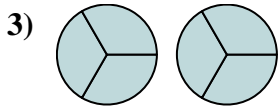
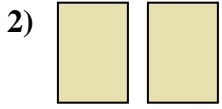
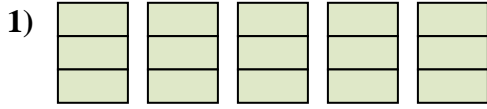




Express the amount shown as a fraction.



Answers

1. _____

2. _____

3. _____

4. _____

5. _____

6. _____

7. _____

8. _____

9. _____

10. _____

11. _____

12. _____

13. _____

14. _____

15. _____



Express the amount shown as a fraction.

- 1)
- 2)
- 3)
- 4)
- 5)
- 6)
- 7)
- 8)
- 9)
- 10)
- 11)
- 12)
- 13)
- 14)
- 15)

Answers

1. $\frac{15}{3}$
2. $\frac{2}{1}$
3. $\frac{6}{3}$
4. $\frac{7}{1}$
5. $\frac{21}{3}$
6. $\frac{18}{3}$
7. $\frac{4}{2}$
8. $\frac{14}{2}$
9. $\frac{12}{2}$
10. $\frac{6}{1}$
11. $\frac{6}{2}$
12. $\frac{5}{1}$
13. $\frac{24}{3}$
14. $\frac{8}{1}$
15. $\frac{8}{2}$